



Name: _____

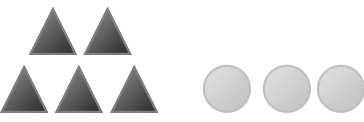
Date: _____

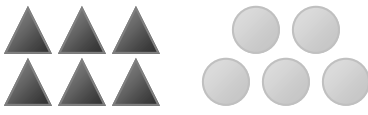
Instructions: Add the triangles and circles together to see how many shapes you have.


Adding Shapes


1. 
 $3 + 2 = \underline{\quad}$


2. 
 $4 + 1 = \underline{\quad}$


3. 
 $5 + 3 = \underline{\quad}$

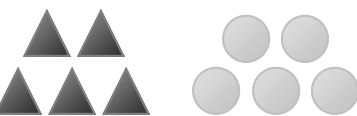
4. 
 $6 + 5 = \underline{\quad}$


5. 
 $1 + 7 = \underline{\quad}$

6. 
 $8 + 2 = \underline{\quad}$

7. 
 $9 + 3 = \underline{\quad}$

8. 
 $2 + 6 = \underline{\quad}$

9. 
 $5 + 5 = \underline{\quad}$

10. 
 $1 + 2 = \underline{\quad}$